



UDAYA PUBLIC SCHOOL
SUMMATIVE ASSESSMENT I (2024 - 25)
CLASS - UKG
SUBJECT - MATHS

MM - 30

DATE -

STUDENT'S NAME -

[A] What comes after number ? (2)

28 37

49 68

[B] Write number names. (4)

14

18

20

10

[C] What comes before number ? (2)

..... 27 45

..... 36 16

[D] Write Shapes name. (3)




.....



.....



.....



[E] Put the sign >, < or =.

(3)

37 55

80 80

45 25

52 63

69 73

72 72

[F] What number comes in between ?

(2)

16 18

46 48

28 30

15 17

[G] Match it.

(5)

17

Ten

10

Eight

8

Twenty

15

Seventeen

20

Fifteen

[H] Complete the patterns.

(2)




.....

.....




.....

.....



[I] Picture Addition.

(2)



[J] Write the table of 2.

(5)

$2 \times 1 =$

$2 \times 2 =$

$2 \times 3 =$

$2 \times 4 =$

$2 \times 5 =$

$2 \times 6 =$

$2 \times 7 =$

$2 \times 8 =$

$2 \times 9 =$

$2 \times 10 =$

